


Product Preview

Subtraction Within 10

Cross Out & Draw Worksheets


Subtraction

Work out the subtraction problems by crossing out the correct number.
The first one has been done for you.


$$9 - 2 =$$


9 yogurt cups are shown. The first two are crossed out with a large 'X'.


7

$$6 - 5 =$$



6 boxes of butter are shown.

$$8 - 1 =$$


8 slices of bread are shown.

$$2 - 1 =$$


2 boxes of cereal are shown.


$$5 - 3 =$$


5 cans of soup are shown.

Open Avenues

Subtraction

Work out the subtraction problems by drawing dots,
then crossing out the correct number.
The first one has been done for you.

$$6 - 2 =$$


6 dots are shown. The first two are crossed out with a large 'X'.

4

$$5 - 0 =$$

$$8 - 5 =$$

$$4 - 1 =$$

$$3 - 2 =$$

Open Avenues




Open Avenues

Subtraction

Work out the subtraction problems by crossing out the correct number.

$$8 - 4 =$$



$$3 - 0 =$$



$$10 - 9 =$$



$$6 - 1 =$$



$$7 - 4 =$$

